



Start - Section 2

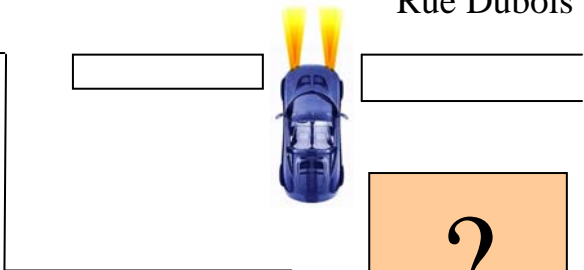
H. Grégoire

Bureau d'information touristique
Facing H. Grégoire
Rue Dubois, service lane of the 640

Rue Dubois

End of Section 2

Ste-Scholastique
Church



?
touriste

Distance to cover

Approximately 25 kilometres

Highway 640

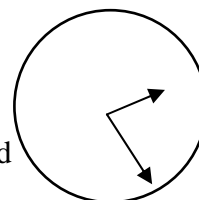
Section 2 INSTRUCTIONS

Your trip odometer should be at zero at the start.

The direction you must take is shown by the hands of a clock. You arrive along the small (small) hand and turn to head in the direction indicated by the minute (long) hand.

Ex : 2:25

Since you arrive along the hour hand and turn to head in the direction indicated by the minute hand, you would turn left in this example.

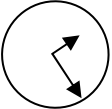
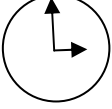

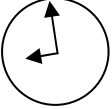
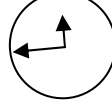

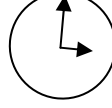

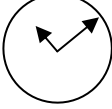



Means that you must stop your vehicle in a safe place and, on foot, answer the questions that follow.

Unless otherwise indicated, you will find the answers within a 0.5 km radius.

Even though not all intersections are given, some of them will be illustrated in order to facilitate your navigation of the route.



Kilometres (miles)	Direction	Information / Question
		Depart from Info Tourist, rue Dubois, St-Eustache See the drawing at the beginning of this section
0,00 km		Rue Dubois
0,30 km (0,20)		 25 ^e Ave. 70 km/h
2,70 km (1,70)		du Petit Chicot St.
2,75 (1,75)		Bridge
		Quest. 1 What do the Bourgeois have? Ans. 1 _____
4,55 (2,85)		 Mtée. Du Domaine
5,85 (3,65)		 Mtée. Godin
5,95 (3,70)		Bridge
6,30 (3,90)		 25 ^e Avenue
		Quest. 2 What does Marie-Claire have? Ans. 2 _____



	<p>Quest. 3 How many rungs does the ladder that climbsto the sky have?</p> <p>Ans.. 3 _____</p>	
<p>7,40 km (4,60)</p> <p>0,00 km</p>		<p>Du Chicot Nord</p> <p>At the STOP SIGN Reset your trip odometre to zero 80 km/h</p>
<p>1,35 (0,85)</p>		<p>Du Chicot Sud 50 km/h</p>
<p>1,55 (0,95)</p>		<p>Bridge</p>
		<p>Warning! Narrow street !</p>
	<p>Quest. 4 How many of the letter « s » does the facade of 7801 have?</p> <p>Ans. 4 _____</p>	
<p>3,00 (1,85)</p>		<p>Du Chicot Nord</p>
	<p>Quest. 5 What is the motorcycle for?</p> <p>Ans. 5 _____</p>	
<p>3,20 (2,00)</p>		<p>Rg. L'Allier</p>
	<p>Quest. 6 Who is born after Anouk, but before Martin?</p> <p>Ans. 6 _____</p>	
<p>4,40 (2,75)</p>		<p>Courbe</p>
<p>4,80 (3,00)</p>		<p>Bridge</p>



4,95 (3,10)			Petite Côte des Anges
5,10 (3,15)			Warning! Cyclist crossing!
	<p>Quest. 7 What does the cocu have?</p> <p>Ans. 7 _____</p>		
6,75 km (4,20) 0,00 km			Rue St-Jacques At the STOP SIGN Reset your trip odometre to zero
0,20 (0,10)			Côte des Anges 50 km/h
0,50 (0,30)			Direction Ste-Scholastique 80 km/h
	<p>Quest. 8 What colour is the well's bucket?</p> <p>Ans.. 8 _____</p>		
5,70 (3,55)			Verdon
	<p>Quest. 9 How many horses with their knights are crossing the road from right to left?</p> <p>Ans. 9 _____</p>		
	<p>Quest. 10 What is his address?</p> <p>Ans. 10 _____</p>		



8,80 (5,45)			de Belle Rivière Street
9,40 (5,85)			Ste-Scholastique 50 km/h
9,45 (5,90)			
10,00 (6,20)			Gas
10,20 (6,35)			Côte des Saints
10,30 (6,40)			Bridge
10,40 (6,45)			Entre the church parking lot
	On foot, answer the following questions:		
	Quest. 11 What is Mme Lacombe's first name? Ans.11 _____		
	Quest. 12 How old is Ste-Scholastique? Ans. 12 _____		
	Quest. 13 What is his name? Ans. 13 _____		

End of Section 2